





Prénom :




date :

Fiche n°3



1 Consigne: Entoure le jeton qui a le plus grand nombre dans chaque paquet.



2 Consigne: Entoure le jeton qui a le plus petit nombre dans chaque paquet.



3 Consigne: Relie les collections au nombre qui correspond. (=)



30

40

36

4 Consigne: Compare et complète avec les signes $<$, $>$ ou $=$.



37

....

29

34

....

14

63

....

36

51

....

60

53

....

38

24

....

42



1 Consigne: Entoure le jeton qui a le plus grand nombre dans chaque paquet.

Illustration of a pencil and a small figure icon.

The chips with numbers 44, 27, and 39 are circled in green.



2 Consigne: Entoure le jeton qui a le plus petit nombre dans chaque paquet.

Illustration of a pencil and a small figure icon.

The chips with numbers 19, 68, and 49 are circled in green.



3 Consigne: Relie les collections au nombre qui correspond. (=)

Illustration of a pencil and a small figure icon.

30	40	36

Green lines connect the collections to their corresponding numbers: 30 figures to 30, 40 figures to 40, and 36 flowers to 36.

4 Consigne: Compare et complète avec les signes $<$, $>$ ou $=$.



Illustration of a pencil and the letters 'ec'.

37	$>$	29	34	$>$	14	63	$>$	36
51	$<$	60	53	$>$	38	24	$<$	42